
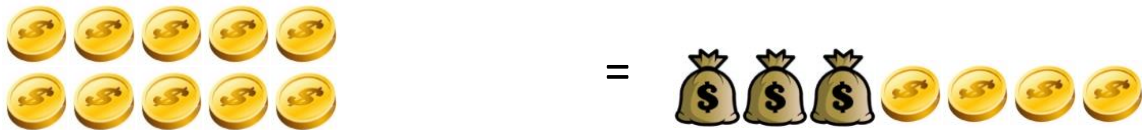
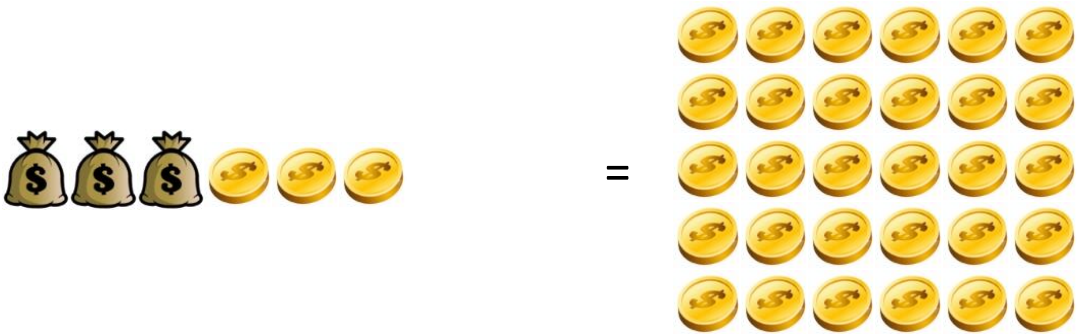


Name: _____

In the problems below, the total number of coins on each side of the equals sign is the same.

1. Find the number of gold coins in each pouch.
2. Write down the steps you use to find the number of coins.
3. Show how you can check your answer.





After you solve problems 1-6, go back and use variables to write equations representing the amount of money in each problem.